


A.M.



analog clock



digital clock



half hour




half past 5
5:30

hour



hour
3 o'clock
3:00

hour hand



Directions:
• Tell students to create riddles for each word. Ask them to work with a friend to guess the word for each riddle.

the meaning

A clock that has an hour hand and a minute hand.

The hours from midnight until noon.


One half hour is 30 minutes. Sometimes called half past.

A clock that uses only numbers to show time.

The shorter hand on a clock that tells the hour.

A unit to measure time.
1 hour = 60 minutes

minute



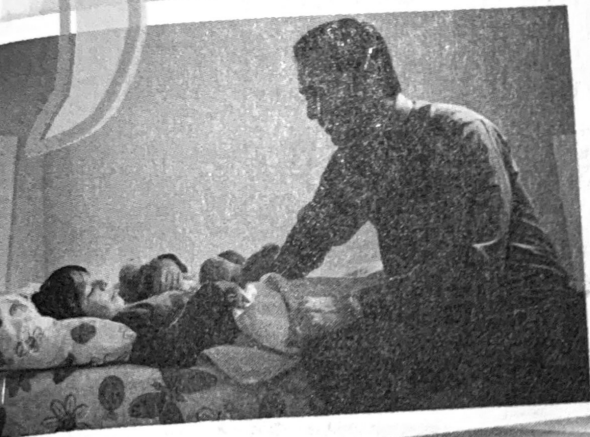
1 minute
60 seconds

minute hand



on 10-6

P.M.



Lesson 10-4

quarter hour



quarter past 12



quarter till 1

P.M.

A.M.

P.M.

- Tell students to draw a picture to show the meaning of a word. Have them work with a friend to guess the word.

this chapter's essential questions. If you go back, have them write or draw examples that help them answer the question.

The longer hand on a clock that tells the number of minutes.

A unit to measure time. Each tick mark on an analog clock.

1 minute = 60 seconds
60 minutes = 1 hour

A quarter hour is 15 minutes. Sometimes called quarter past or quarter till.

4 quarter hours = 1 hour

The hours from noon until midnight.